


ENIGMAS

Alumnos:

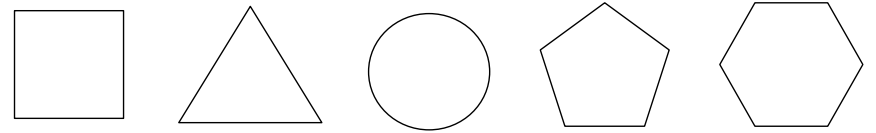
Enigma 1: ¿Cuánto vale cada figura?



Ahora calcula:

$$\square \cdot \triangle + \bigcirc - \pentagon \div \hexagon =$$




Enigma 2: ¿Cuánto vale cada figura?




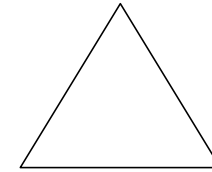

Ahora calcula:

$$\square \cdot \triangle + \bigcirc - \pentagon \div \hexagon =$$

Enigma 3: ¿Cuánto vale cada figura?



Enigma 5: ¿Cuánto vale cada figura?



Enigma 4: ¿Cuánto vale cada figura?

